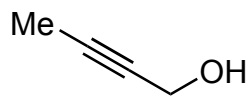


Total Synthesis of Putative Chagosensine

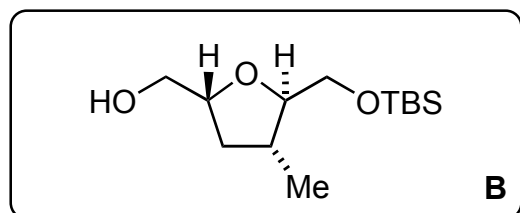
Heinrich, M.; Murphy, J. J.; Ilg, M. K.; Letort, A.; Frasz, J.; Philipps, P.; Fürstner, A.
Angew. Chem. Int. Ed. **2017**, *57*, 13578–13581.



1-4

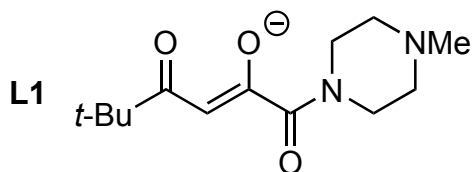


5

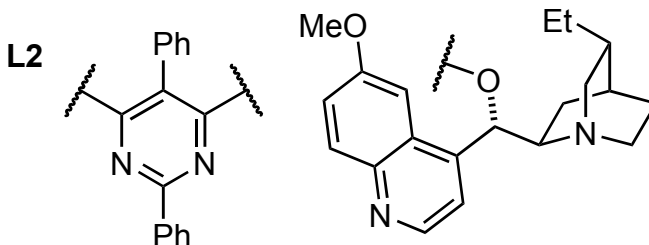


6-11

- 1) H₂, Pd/BaSO₄, quinoline
- 2) *t*-BuOOH, Ti(O*i*-Pr)₄, (+)-DET
- 3) TBSCl, imidazole, DMAP
- 4) allylmagnesium chloride, CuI



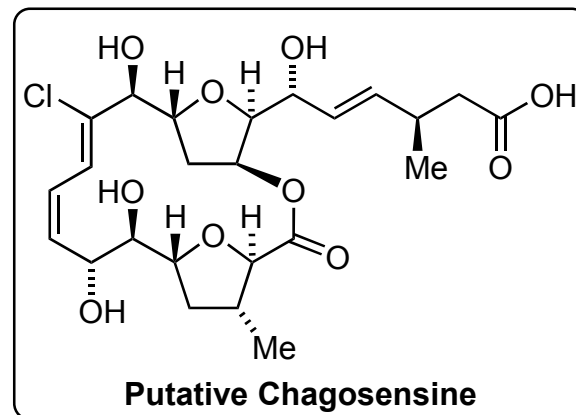
- 5) Co(L1)₂, *t*-BuOOH, O₂, *i*-PrOH



- 6) SO₃•Py, *i*-Pr₂NEt, DMSO
- 7) (CF₃CH₂O)₂P(=O)CH₂CO₂Me
KHMDS, 18-crown-6
- 8) K₂OsO₄•(H₂O), K₃Fe(CN)₆,
K₂CO₃, **L2**, MeSO₂NH₂
- 9) Me₂C(OMe)₂, *p*-TsOH
- 10) LiAlH₄
- 11) SO₃•Py, *i*-Pr₂NEt, DMSO

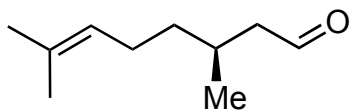
2) Please name the reaction

5) Please name the reaction
and provide a mechanism

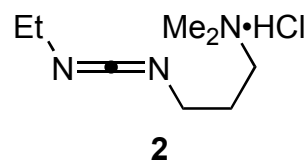
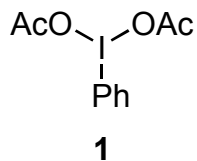




12-15

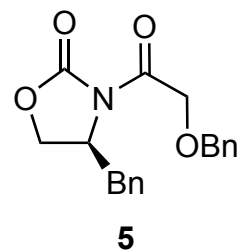
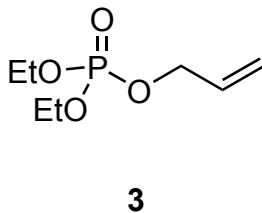


16-20



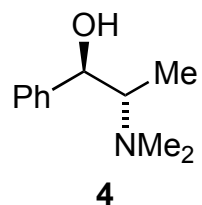
- 12) $[\text{Ph}_3\text{PCH}_2\text{I}]\text{I}$, NaHMDS, HMPA
 13) HF·Py, pyridine
 14) TEMPO, **1**, MeCN(aq)
 15) TMSCH₂CH₂OH, **2**, DMAP

14) Provide a mechanism



- 16) (CH₂OH)₂, CH(OEt)₃, CSA
 17) O₃, Sudan red, *then* Me₂S
 18) Pd(OAc)₂, **3**, NaHCO₃
 19) **4**, Bu₂BOTf, Et₃N
 20) MOMCl, TBAI

18) Please name the reaction
Hint: 2 is the terminal oxidant




21-28

- 21) $\text{LiBH}_3(\text{OH})$
- 22) $\text{SO}_3 \cdot \text{Py}$, *i*-Pr₂NEt, DMSO
- 23) $\text{MgBr}_2 \cdot \text{OEt}_2$, Allyl-TMS
- 24) TBSOTf, 2,6-lutidine,
- 25) DDQ, buffer Ph = 7.4
- 26) $\text{Co}(\mathbf{L1})_2$, *t*-BuOOH, O₂, *i*-PrOH
- 27) $\text{SO}_3 \cdot \text{Py}$, *i*-Pr₂NEt, DMSO
- 28) $\text{Zn}(\text{OTf})_2$, **5**, TMS-acetylene, *i*-Pr₂NEt, then K_2CO_3 , MeOH

23) Provide a stereochemical model

28) Please name the reaction

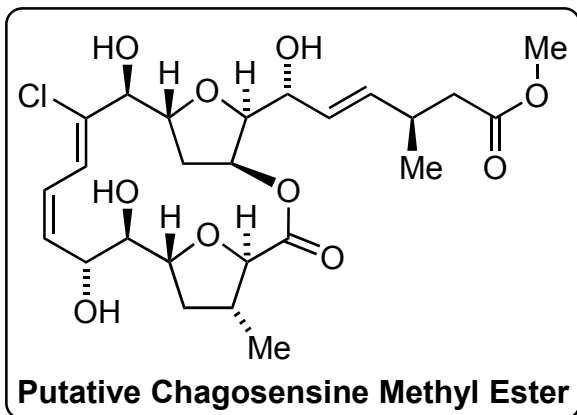


29

- 29) $(\text{Bu}_3\text{Sn})_2$, $[\text{PdCl}_2(\textit{t}\text{-BuCN})_2]$



30-37



Eleven stereogenic centers
Two 2,5-*trans*-trisubstituted THF's
Very strained 16-membered macrolatone
Unprecedented Z,Z-chloro-1,3-diene

- 30) $[(t\text{-Bu}_3\text{P})_2\text{Pd}]$, $[\text{Ph}_2\text{PO}_2][\text{NBu}_4]$, LiCl, **D**
- 31) CuCl_2 , 2,6-Lutidine
- 32) MOMCl, TBAI, *i*-Pr₂NEt
- 33) TBAF
- 34) 2,4,6-trichlorobenzoyl chloride, *i*-Pr₂NEt
then DMAP, Δ
- 35) Me₂BBr
- 36) NaClO₂, NaH₂PO₄, 2-methyl-2-butene
- 37) CH₂N₂

36) Please name the reaction