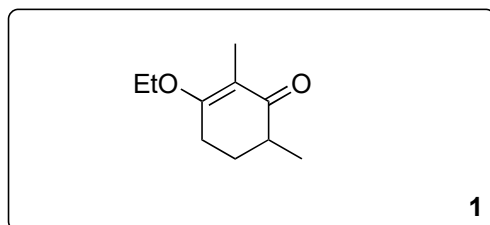


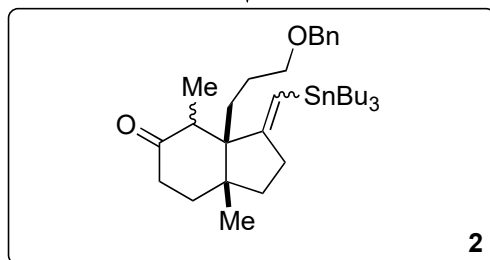
Total Synthesis of the Diterpene Waihoensene

Lisa-Catherine Rosenbaum, Maximilian Häfner, and Tanja Gaich

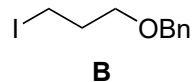
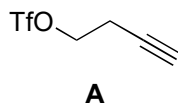
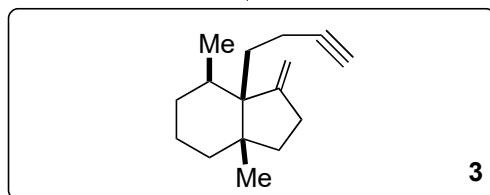
Angew. Chem. Int. Ed. **2021**, *60*, 2939



1–3



4–10

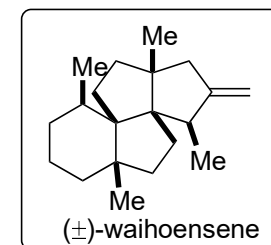
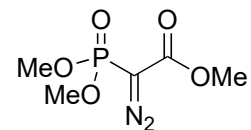


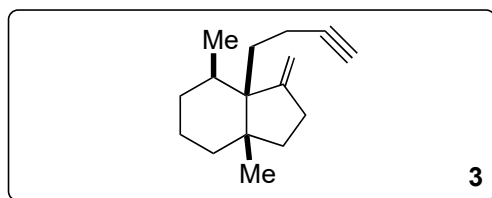
- 1) LiTMP, DMPU, *then A*
- 2) *t*-BuLi, **B**, *then substrate*
then 2M HCl
- 3) HSnBu₃, AIBN, 80 °C, PhH

Hint: A new ring is formed during step 3.

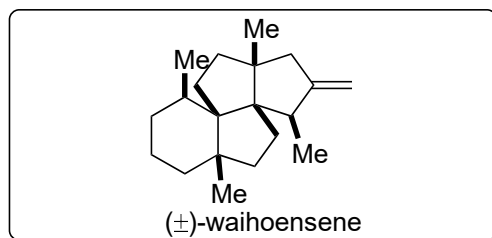
- 4) PPTS
- 5) NaOH, MeOH
- 6) NH₂NHTs
- 7) catechol borane, *then*
NaOAc·3H₂O, reflux
- 8) Na, NH₃(l)
- 9) SO₃·pyr, Et₃N, DMSO
- 10) Ohira-Bestmann reagent,
K₂CO₃, MeOH

- 9) What is the name of this transformation? Parikh–Doering oxidation
- 10) Please provide the structure of the reagent.





11–14



- 11) $\text{Co}_2(\text{CO})_8$, xylene, reflux
- 12) LiTMP, DMPU *then* MeI
- 13) MeLi, CuCN, $\text{BF}_3 \cdot \text{OEt}_2$
- 14) $\text{Ph}_3\text{PCH}_2\text{Br}$, KO t -Bu, 110 °C

11) What is the name of this reaction? Pauson-Khand