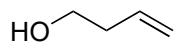



Total Synthesis of (-)-Allosecurinine

Andrew B. Leduc, Michael A. Kerr

Angew. Chem. Int. Ed. **2008**, *47*, 7945–7948.



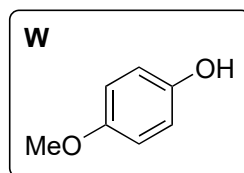
1 – 7



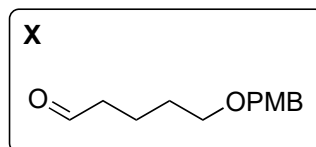
8 – 12



- 1) **W**, PPh₃, DIAD
- 2) K₃[Fe(CN)₆], K₂CO₃, (DHQD)₂PHAL, K₂OsO₂(OH)₄
- 3) MsCl, NEt₃
- 4) dimethylmalonate, NaH
- 5) CAN
- 6) TsCl, DABCO
- 7) *N*-hydroxyphthalimide, DBU

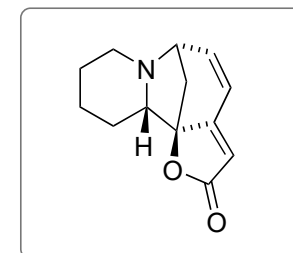


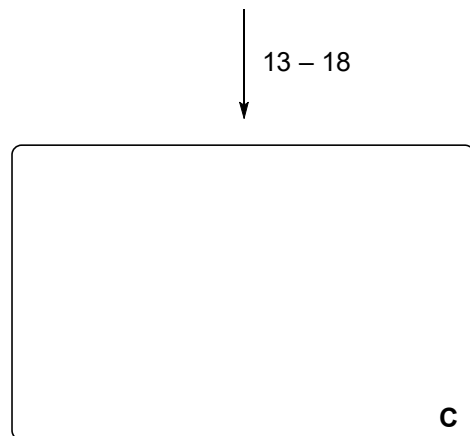
- 8) N₂H₄·H₂O
- 9) Yb(OTf)₃, **X**
- 10) Pd(OH)₂, H₂, Boc₂O
- 11) NaCN, wet DMSO
- 12) TMSCHN₂



2) Name the reaction.

9) Come up with a mechanism.

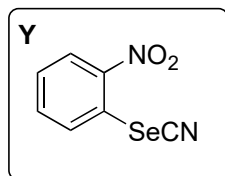




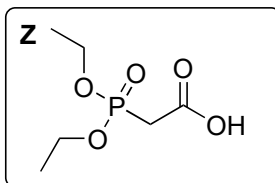
↓
19 – 24

(-)-Allosecurinine

- 13) PBU_3 , **Y** then H_2O_2
- 14) KHMDS then Davis oxaziridine
- 15) CaCl_2 , NaBH_4
- 16) IBX, DMSO
- 17) vinylmagnesium bromide
- 18) IBX, DMSO



- 19) DCC, **Z**
- 20) LiBr, NEt_3
- 21) Hoveyda-Grubbs II
- 22) DDQ
- 23) MsCl, NEt_3
- 24) TFA then silica gel



13) Name the reaction.

21) Structure of HG II?

